


Day 31

Name: _____


Date: _____

How many are there?


Fill the circle that is next to the correct answer.




- ☐ 10
- ☐ 11
- ☐ 9




- ☐ 14
- ☐ 11
- ☐ 9




- ☐ 14
- ☐ 13
- ☐ 9



- ☐ 3
- ☐ 9
- ☐ 0



- ☐ 14
- ☐ 15
- ☐ 9



- ☐ 4
- ☐ 11
- ☐ 12

Day 32

Name: _____

Date: _____

How many are there?
Circle the correct answer.

●	●	●	●
●	●		
●	●		
●	●		
●	●		
15	12	10	

●	●	●	●
●	●	●	●
●	●		
●	●		
●	●		
15	13	14	

●	●		
●	●		
●	●		
●	●		
●	●		
9	10	11	

●	●	●	●
●	●	●	●
●	●	●	
●	●		
●	●		
15	13	14	

Day 33

Name: _____

Date: _____

How many tally marks are there?
Write the correct answer.



tally marks



tally marks



tally marks



tally marks



tally marks



tally marks

Day 34

Name: _____

Date: _____

Write the answer and read the full sentence.

1. What number comes after 14?comes after
2. What number comes before 4?comes before
3. What number comes before 12?comes before
4. What number comes after 10?comes after

Fill in the missing numbers.

	3	4
--	---	---

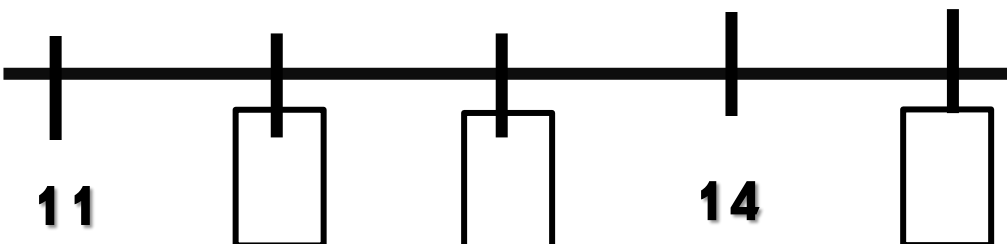
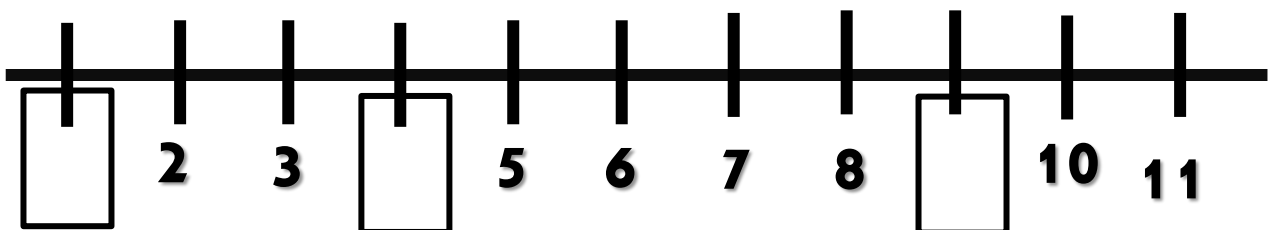
1	2	
---	---	--

	9	
--	---	--

13	14	
----	----	--

9	10	
---	----	--

	11	12
--	----	----



Day 35

Name: _____

Date: _____

Write the answer and read the full sentence.

1. What number comes between 8 and 10 ?comes between and
2. What number is in the middle of 11 and 13?is in the middle of and
3. What number is between 4 and 6?is between and
4. What number comes in the middle of 6 and 8?.....comes in the middle of and

Fill in the missing numbers.

3		5
---	--	---

1		3
---	--	---

13		15
----	--	----

9		11
---	--	----

5		7
---	--	---

12		14
----	--	----

Circle the number that is in the middle.

9	15	11
---	----	----

10	1	11
----	---	----

7	13	6
---	----	---

4	8	12
---	---	----

Trace the sentence.

5 is between 6 and 7.