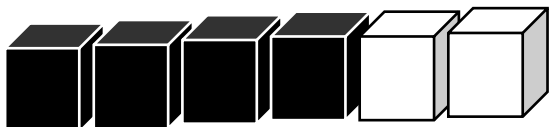


Day 61

Name: _____

Date: _____

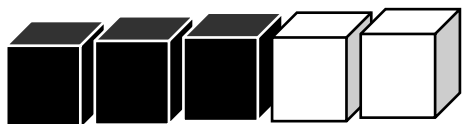
Add the cubes.



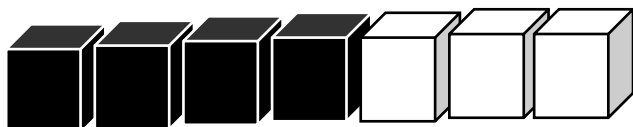
$4 + 2 =$



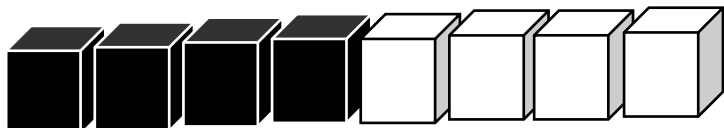
$3 + 1 =$



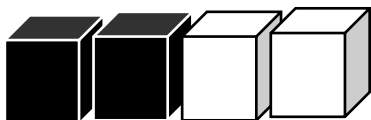
$3 + 2 =$



$4 + 3 =$



$4 + 4 =$



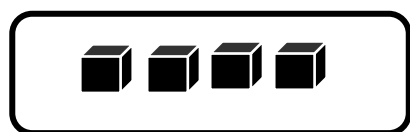
$2 + 2 =$

Day 62

Name: _____

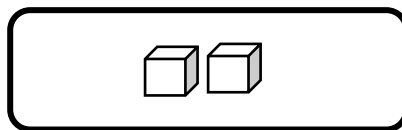
Date: _____

Fill in the missing number.



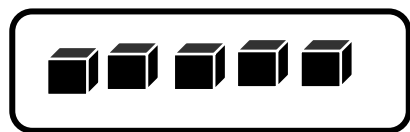
4

+

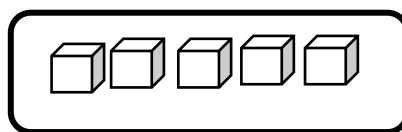


=

6



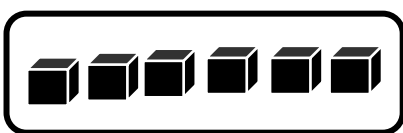
+



5

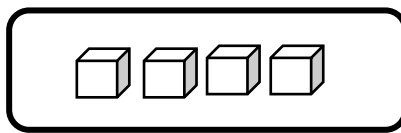
=

10

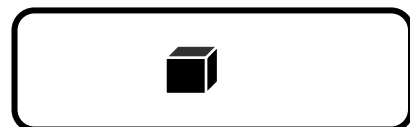


6

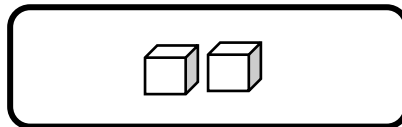
+



=



+



=



Day 63

Name: _____

Date: _____

How do you make 5? Circle it

$3 + 3$

$2 + 1$

$4 + 1$

How do you make 10? Circle it

$9 + 2$

$9 + 1$

$9 + 0$

How do you make 7? Circle it

$0 + 7$

$1 + 7$

$3 + 5$

8 - 2 is one way to make 6.

Can you find another way to make 6?

+

=

6

Day 64

Name: _____

Date: _____

Write these as numbers in an addition sentence

Five plus one is six

Ten plus zero is ten

Four plus four is eight

One plus two is three

Fill in the number names for the addition sentences

$$6 + 4 = 10$$

_____ plus _____ is _____

$$1 + 0 = 0$$

_____ plus _____ is _____

Day 65

Name: _____

Date: _____

Write **true** or **false**

Five plus one is six

Ten plus zero is ten

Four plus four is seven

Two plus five is ten

Nine plus zero is nine

Zero plus zero is zero

One plus one is two
